


İşlemlerin sonucuna göre boş bırakılan yere gelecek sayıyı bul.

5 +



=

9


6 +



=

8


8 +



=

10

2 +



=

6

3 +



=

7